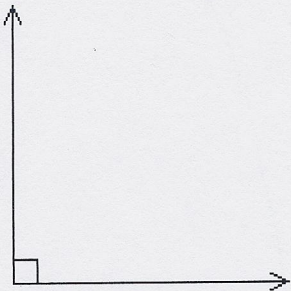


Tell whether the angle is acute, right, obtuse, or straight.

9)



A) Right

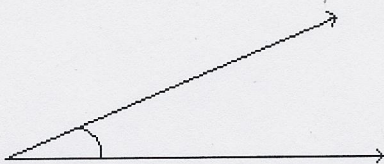
B) Acute

C) Straight

D) Obtuse

9) _____

10)



A) Acute


B) Straight

C) Right

D) Obtuse

10) _____

11)



A) Obtuse

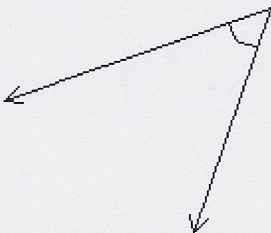
B) Straight

C) Acute

D) Right

11) _____

12)



A) Acute

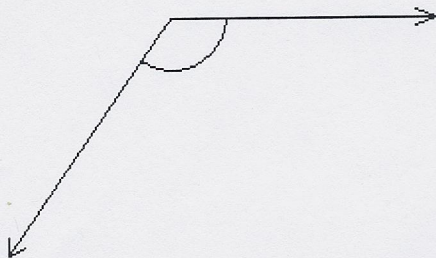
B) Straight

C) Right

D) Obtuse

12) _____

13)



A) Acute

B) Obtuse

C) Right

D) Straight

13) _____