

Unit 2: Worksheet 2

Domain and Range

Name _____

Period _____

In 1 – 7, give the domain and range for each of the following, then determine whether it's a function.

1.

x	y
-4	-5
-3	-8
-2	-11
-1	-14

Domain: _____

Range: _____

Function? _____

2.

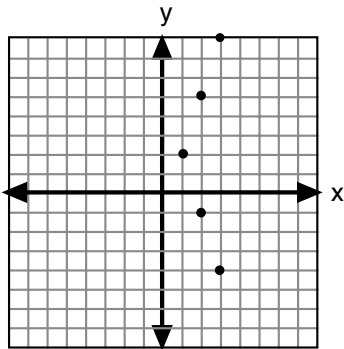
$\{(9, 0), (0, 9), (4, 5), (5, 4)\}$

Domain: _____

Range: _____

Function? _____

3.



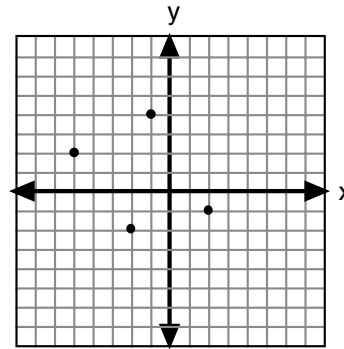
Ordered Pairs:

Domain: _____

Range: _____

Function? _____

4.



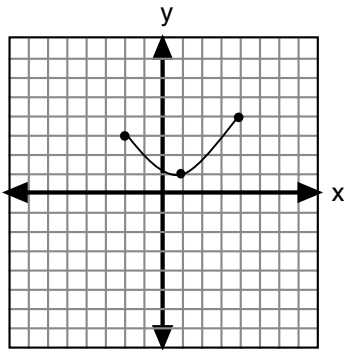
Ordered Pairs:

Domain: _____

Range: _____

Function? _____

5.

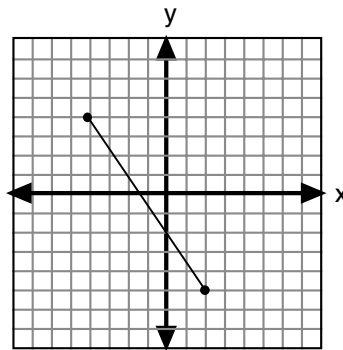


Domain: _____

Range: _____

Function? _____

6.

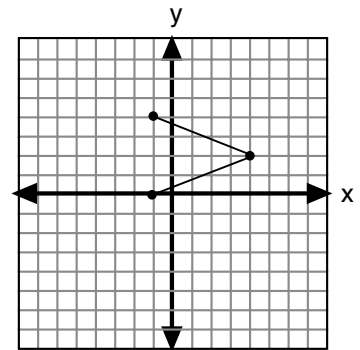


Domain: _____

Range: _____

Function? _____

7.



Domain: _____

Range: _____

Function? _____