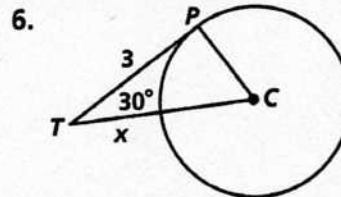
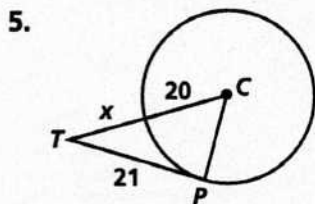
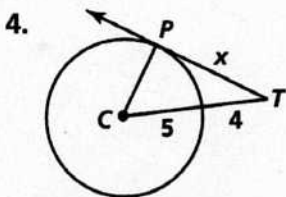
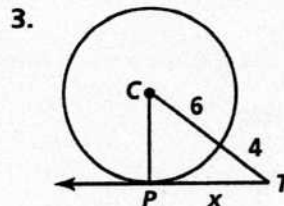
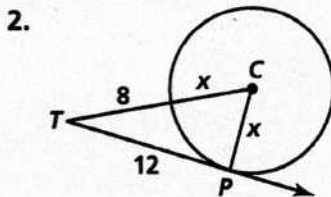
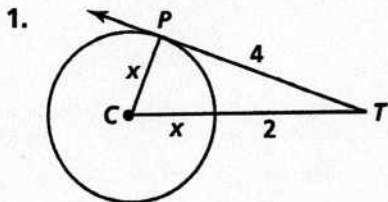


# Practice 12-2

## Example Exercises

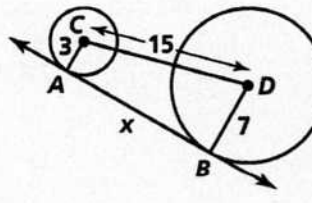
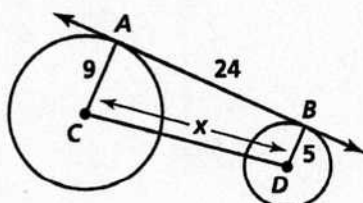
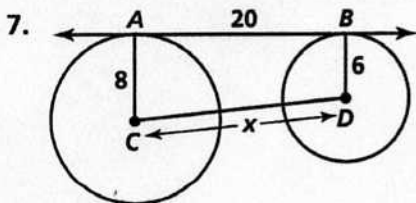
### Example 1

In each diagram,  $\overline{TP}$  is tangent to  $\odot C$  at  $P$ . Find the value of  $x$ .



### Example 2

In each diagram,  $\overline{AB}$  is tangent to circles  $C$  and  $D$ . Find the value of  $x$ .



### Example 3

In each diagram, a polygon circumscribes a circle. Find the perimeter of each polygon.

