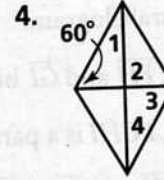
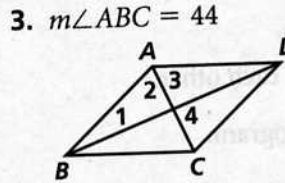
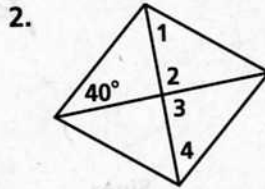
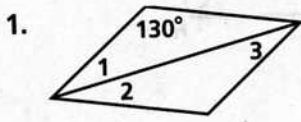


# Practice 9-3

## Example Exercises

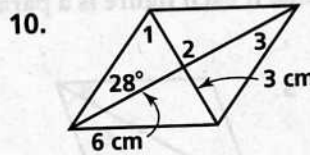
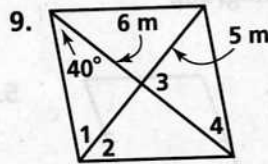
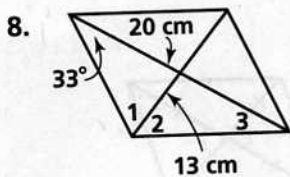
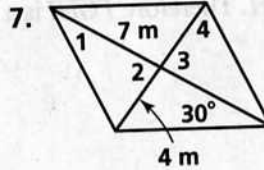
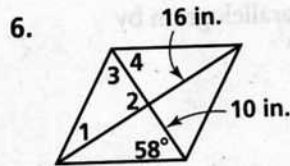
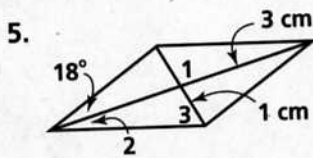
### Example 1

Find the measures of the numbered angles for each rhombus.



### Example 2

For each rhombus (a) find the measures of the numbered angles and then (b) find the area.



### Example 3

For each parallelogram (a) choose the best name and then (b) find the value of the variable(s).

